



Ευρωπαϊκή Ένωση
Ευρωπαϊκό Κοινωνικό Ταμείο



Κυπριακή Δημοκρατία



Διαρθρωτικά Ταμεία
της Ευρωπαϊκής Ένωσης στην Κύπρο

Το Έργο συγχρηματοδοτείται από το Ευρωπαϊκό Κοινωνικό Ταμείο της Ε.Ε. και την Κυπριακή Δημοκρατία



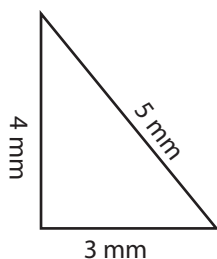
ΥΠΟΥΡΓΕΙΟ ΠΑΙΔΕΙΑΣ, ΠΟΛΙΤΙΣΜΟΥ, ΑΘΛΗΤΙΣΜΟΥ ΚΑΙ ΝΕΟΛΑΙΑΣ
Διεύθυνση Μέσης Τεχνικής και Επαγγελματικής Εκπαίδευσης και Κατάρτισης

ΟΝΟΜΑΤΕΠΩΝΥΜΟ:

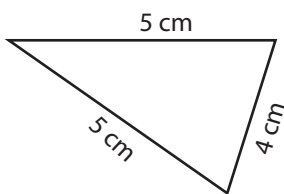
ΤΑΞΗ:

Να υπολογίσετε την περίμετρο των πιο κάτω σχημάτων:

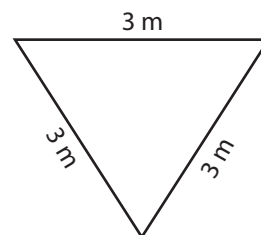
1)



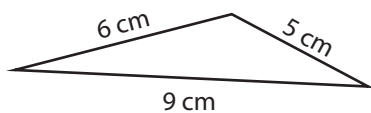
2)



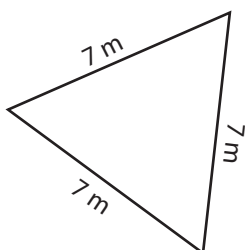
3)



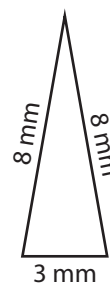
4)



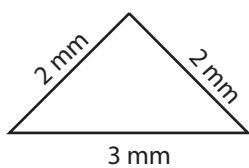
5)



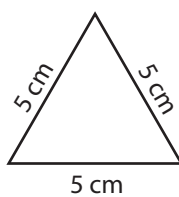
6)



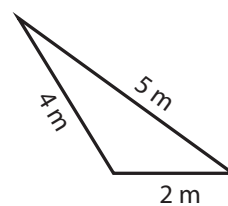
7)



8)

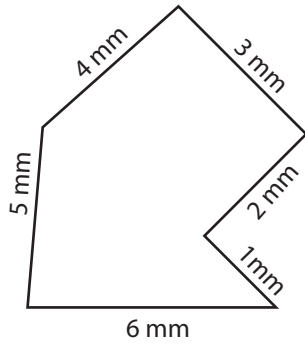


9)

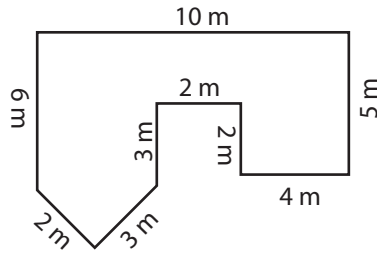


Να υπολογίσετε την περίμετρο των πιο κάτω σχημάτων:

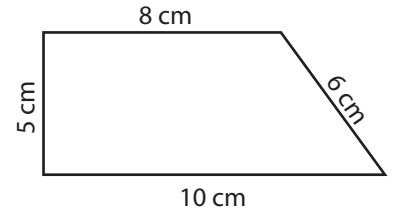
1)



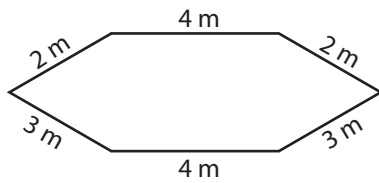
2)



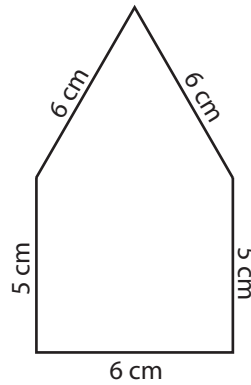
3)



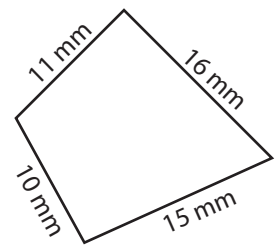
4)



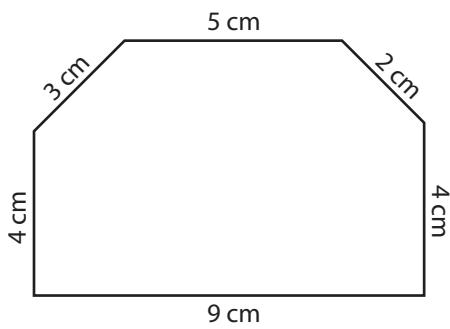
5)



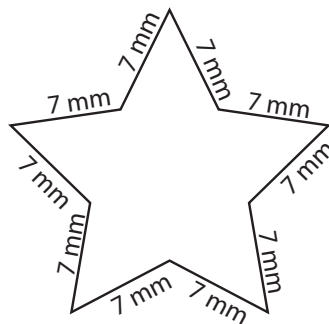
6)



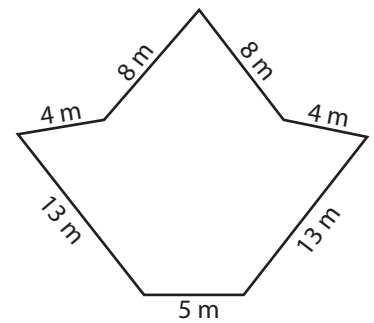
7)



8)

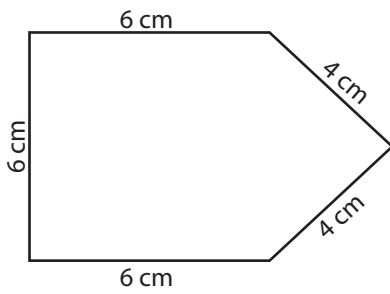


9)

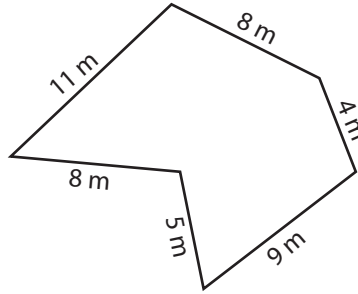


Να υπολογίσετε την περίμετρο των πιο κάτω σχημάτων:

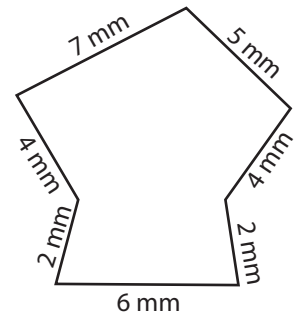
1)



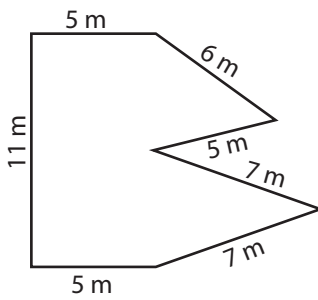
2)



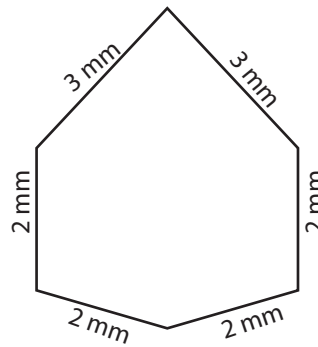
3)



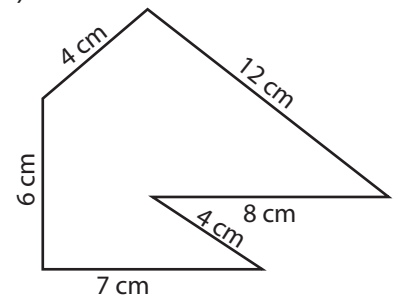
4)



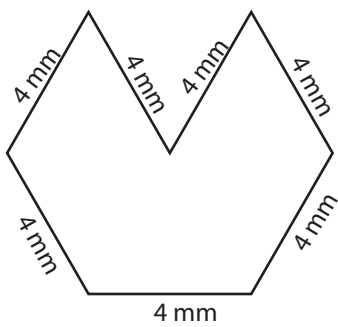
5)



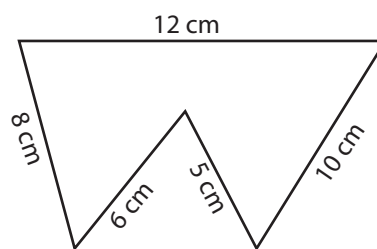
6)



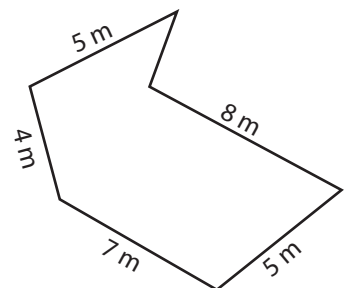
7)



8)

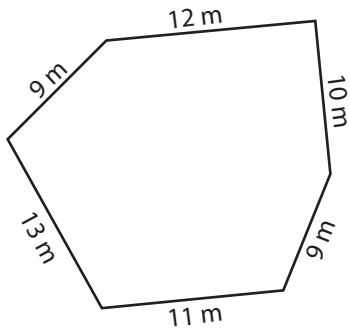


9)

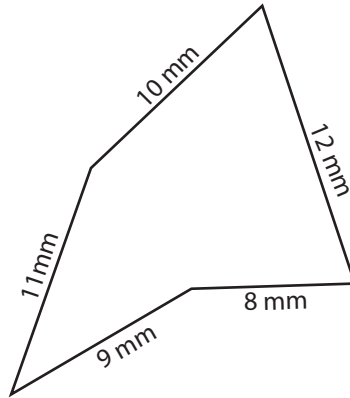


Να υπολογίσετε την περίμετρο των πιο κάτω σχημάτων:

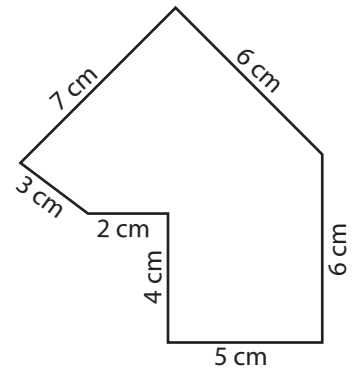
1)



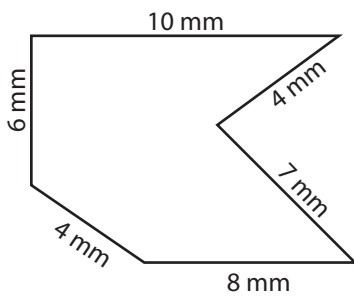
2)



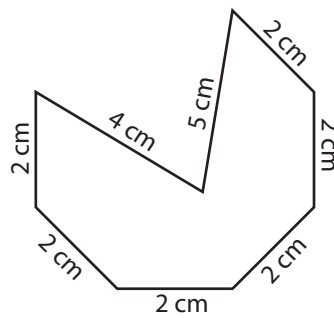
3)



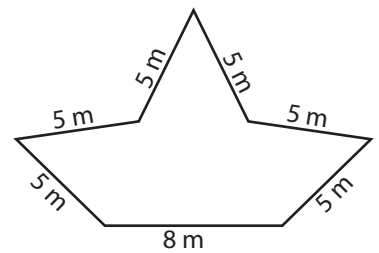
4)



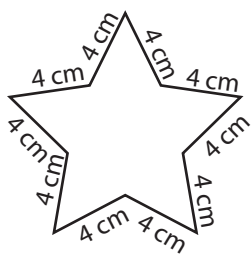
5)



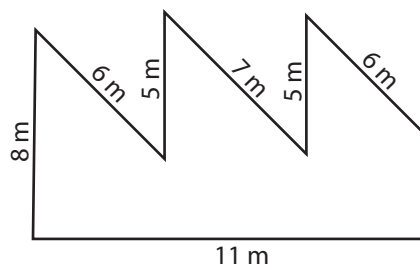
6)



7)



8)



9)

